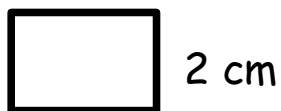


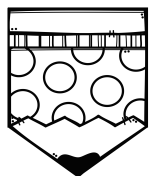
**Aire**  
(mesure conventionnelle)

La mesure de la surface de la figure



4 cm

$$A = 4 \times 2$$
$$A = 8 \text{ cm}^2$$



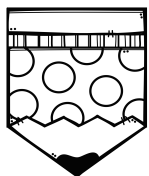
**Aire**  
(mesure conventionnelle)

La mesure de la surface de la figure



4 cm

$$A = 4 \times 2$$
$$A = 8 \text{ cm}^2$$



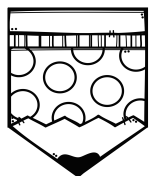
**Aire**  
(mesure conventionnelle)

La mesure de la surface de la figure



4 cm

$$A = 4 \times 2$$
$$A = 8 \text{ cm}^2$$



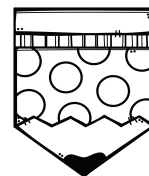
**Aire**  
(mesure conventionnelle)

La mesure de la surface de la figure



4 cm

$$A = 4 \times 2$$
$$A = 8 \text{ cm}^2$$



**Aire**  
(mesure conventionnelle)

La mesure de la surface de la figure



4 cm

$$A = 4 \times 2$$
$$A = 8 \text{ cm}^2$$

