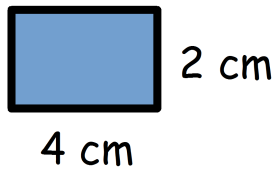



Périmètre


La longueur totale du contour d'une figure plane



$$P = 4 + 2 + 4 + 2$$
$$P = 12 \text{ cm}$$

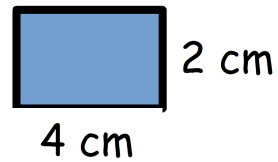


$$P = 2 + 2 + 2 + 2$$
$$P = 8 \text{ cm}$$

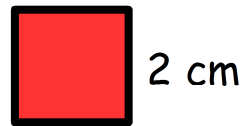


Périmètre


La longueur totale du contour d'une figure plane



$$P = 4 + 2 + 4 + 2$$
$$P = 12 \text{ cm}$$

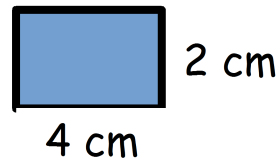


$$P = 2 + 2 + 2 + 2$$
$$P = 8 \text{ cm}$$

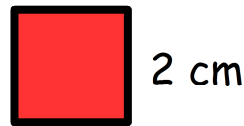


Périmètre

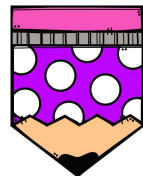
La longueur totale du contour d'une figure plane



$$P = 4 + 2 + 4 + 2$$
$$P = 12 \text{ cm}$$

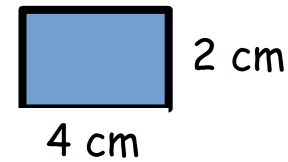


$$P = 2 + 2 + 2 + 2$$
$$P = 8 \text{ cm}$$

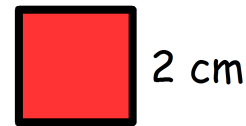


Périmètre

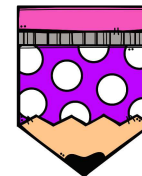
La longueur totale du contour d'une figure plane



$$P = 4 + 2 + 4 + 2$$
$$P = 12 \text{ cm}$$

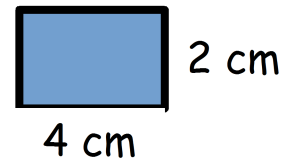


$$P = 2 + 2 + 2 + 2$$
$$P = 8 \text{ cm}$$

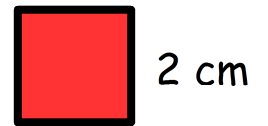


Périmètre

La longueur totale du contour d'une figure plane



$$P = 4 + 2 + 4 + 2$$
$$P = 12 \text{ cm}$$



$$P = 2 + 2 + 2 + 2$$
$$P = 8 \text{ cm}$$

